

Homework Assignment #7 – due via Moodle at 11:59 pm on Wednesday, Apr. 5, 2023

Instructions, notes, and hints:

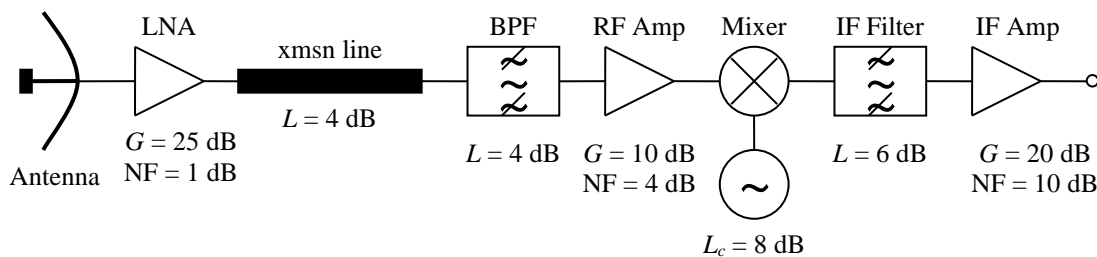
Provide the details of all solutions, including important intermediate steps. You will not receive credit if you do not show your work.

It is your responsibility to review the solutions when they are posted (including those for ungraded problems) and to understand and rectify any conceptual errors that you might have. You may contact me at any time for assistance.

The first set of problems will be graded and the rest will not be graded. Only the graded problems must be submitted by the deadline above. Do not submit the ungraded problems. One graded problem will be randomly selected for detailed evaluation; the others will be evaluated using a coarse rubric.

Graded Problems:

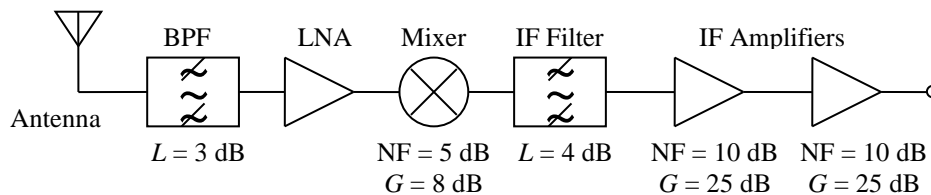
1. Find the overall standard noise figure and equivalent noise temperature of the receiver system shown below. The passband of the first filter (after the transmission line) is 9.5–10.5 GHz, and that of the IF filter is 1.10–1.11 GHz. The local oscillator tunes 8.9–9.2 GHz. There is no significant selectivity (i.e., no other narrow filters) beyond the IF amplifier. The later stages also contribute negligibly to the overall noise figure. The variable L_c represents the conversion loss of the mixer. It indicates that the power level of the output IF signal is 8 dB less than the power level of the input RF signal. The indicated noise figures in the diagram are standard and based on a temperature of 290 K.



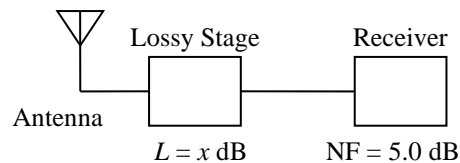
2. Repeat the previous problem with the positions of the transmission line and the LNA interchanged. Compare the results of the previous problem and to those of this problem and comment.
3. Find the actual power level P_N of the internally generated noise from an amplifier with a gain of 20 dB and a noise figure of 11 dB. Express the power level in dBm. The amplifier is used in a receiver system with an operational bandwidth of 50 kHz. Assume a standard temperature of 290 K.

(continued on next page)

4. Suppose that a new receiver is being designed for the 2.4-2.5 GHz frequency range and is to have a system noise figure no greater than 2.0 dB. A block diagram of the receiver's front end is shown below. The input band-pass filter, IF filter, mixer, and IF amplifier circuits have already been selected, and they have the indicated losses, noise figures, and gains. (The mixer uses active devices, so it has gain.) The transistor selected for the LNA will yield a noise figure of 0.5 dB if it is biased properly. The front-end bandpass filter has lower and upper cut-off frequencies of 2.3 and 2.6 GHz, respectively, and the IF filter has a bandwidth of 20 MHz. The circuitry following the IF amplifiers contributes negligible noise. The transmission line between the antenna and the receiver's input port has negligible loss. You have been asked to find the minimum required gain of the LNA to achieve the desired system noise figure; however, you should find that it can't be done! Explain why not. The indicated noise figures in the diagram are standard and based on a temperature of 290 K.



5. As shown below, a receiver has a noise figure of 5.0 dB. Prove that if a lossy stage (such as a filter or lossy transmission line) is added to the input of the receiver, then the noise figure of the overall system will increase by the loss of the new stage expressed in decibels. For example, if the loss of the first stage is 3.5 dB, then the overall noise figure of the system will be $3.5 + 5.0 = 8.5$ dB.



(continued on next page)

Ungraded Problem:

The following problem will not be graded. However, you should attempt to solve them on your own and then check the solutions. Try not to give up too quickly if you struggle to solve any of them. Move on to a different problem and then come back to the difficult one after a few hours.

- One of the challenges with image rejection mixers like the one shown below is the amplitude and phase mismatch between the two paths through the mixer. Either type of mismatch will cause the image signal not to be completely canceled. The two parts of this problem consider separately the impacts of amplitude and phase mismatches.

- Suppose that there is a 1.2 dB amplitude mismatch between the upper and lower signal paths but that the phase shifts along each path are exactly equal. The result is that the phase-shifted and frequency-translated desired (RF) and image signals at node v_e each have an amplitude of $A_e = 1.00$ mV, and the corresponding signals at node v_f each have an amplitude of $A_f = 1.15$ mV. (It is unlikely that the RF and image amplitudes would be equal. They are assumed equal here to highlight the effect of amplitude mismatch.) Find the ratio of the image amplitude at the output of the summing junction to that of the RF amplitude expressed in dB. The downconverted components at the summing junction can be expressed as

$$v_{out}(t) = v_e(t) + v_f(t) = \frac{1}{2} [A_e \cos(\omega_o t - \omega_1 t) + A_e \cos(\omega_2 t - \omega_o t - 90^\circ)] \\ + \frac{1}{2} [A_f \cos(\omega_o t - \omega_1 t) + A_f \cos(\omega_2 t - \omega_o t + 90^\circ)]$$

- Now suppose that there is a 2.2° phase mismatch between the upper and lower signal paths in the mixer shown below but that the amplitude changes along each path are exactly equal. The result is that the output of the mixer can be expressed as

$$v_{out}(t) = v_e(t) + v_f(t) = \frac{1}{2} [A_e \cos(\omega_o t - \omega_1 t) + A_e \cos(\omega_2 t - \omega_o t - 90^\circ)] \\ + \frac{1}{2} [A_f \cos(\omega_o t - \omega_1 t + 2.2^\circ) + A_f \cos(\omega_2 t - \omega_o t + 92.2^\circ)],$$

where the signal component amplitudes are equal (i.e., $A_e = A_f$). Find the ratio of the downconverted image signal strength at the output of the summing junction relative to that of the downconverted RF signal expressed in dB.

